

Katedra rozvojových studií a katedra geografie

Přírodovědecká fakulta

Univerzita Palackého v Olomouci

Skupina:

Číslo uchazeče (nevyplňujte): .....

## PŘIJÍMACÍ ŘÍZENÍ PRO AKADEMICKÝ ROK 2009/2010

Přijímací zkouška ze **zeměpisu a všeobecného přehledu**

Obor **Mezinárodní rozvojová studia**

1. Následující pojmy rozděľ podle států, ke kterým patří: [8 b.]

*Inkové, Laplatská oblast, Patagonie, Titicaca, Newfoundland, Maracaibo, ropa*

ARGENTINA

VENEZUELA

PERU

Laplatská oblast

Maracaibo

Inkové

Patagonie

ropa

Titicaca

Který pojem zůstal nezařazený?

Newfoundland

Ke kterému státu patří?

Kanada

2. Doplňte názvy států, pod jejichž správou spadají uvedená závislá území: [6 b.]

závislé území	vlastník území (stát)
<i>Bermudy</i>	Velká Británie
<i>Faerské ostrovy</i>	Dánsko
<i>Falklandy</i>	Velká Británie
<i>Martinik</i>	Francie
<i>Nová Kaledonie</i>	Francie
<i>Portoriko</i>	USA

3. Doplňte tabulku podle vzoru v prvním řádku: [4 b.]

město	čas v daném okamžiku (v hodinách)	poledník procházející středem příslušného časového pásma
Olomouc	13.00	15° v. d.
Ankara	14.00	30° v. d.
Denver	5.00	105° z. d.
Hanoj	19.00	105° v. d.
Manila	20.00	120° v. d.

4. Z dvojice měst zakroužkuj to, které leží více na sever: [4 b.]

- a) Accra                      **Dakar**  
b) Harare                     **Lusaka**  
c) **Ašchabad**                Teherán  
d) **Hanoj**                      Phnompenh

5. Researchers on Isla Moribunda found out that every year 10% of all animal species living there become extinct. Total number of all animal species on the island today is 2,000. How many animal species will remain on the island three years from now? [2 p.]

1,458

6. In the pictures you can see different religious rituals of important world religions. Write the names of these religions below each picture (you may write either in Czech or in English): [4 p.]




Buddhism (buddhismus)



Christianity (křesťanství)



Judaism (judaismus)



Islam (islám)

7. Which of the following statements related to European integration is **not** true? [2 p.]

- a) The European Union has 27 members.  
**b) Finland has not yet adopted the euro.**  
c) The European Central Bank is located in Frankfurt am Main.  
d) Germany was a founding member of the European Communities.

8. Who is the current secretary general of the United Nations? [2 p.]  
a) **Ban Ki-moon**  
b) Kofi Annan  
c) Kim Jong-il  
d) Javier Solana
9. Select which of the following countries are not members of OPEC: [2 p.]  
a) Saudi Arabia, Iraq  
b) **Russia, Norway**  
c) Algeria, Kuwait  
d) Venezuela, Nigeria
10. What is the acronym of a Czech organization that associates non-governmental development organizations? [2 p.]  
a) CzechAid  
b) Oxfam  
c) **FoRS**  
d) ADRA
11. Which countries are not the priority countries of Czech Official Development Assistance? [2 p.]  
a) Angola, Moldova  
b) **Cambodia, Namibia**  
c) Yemen, Serbia  
d) Zambia, Mongolia
12. What is the name of an Afghan province, where the Czech Provincial Reconstruction Team (PRT) is operating? [2 p.]  
a) Herat  
b) Nuristan  
c) **Logar**  
d) Paktiya
13. At least 1.5 million Cambodians died from execution, forced hardships, or starvation during the brutal regime (1975-1979) under the leader Pol Pot. How was this regime called? [2 p.]  
a) Vietcong  
b) **Khmer Rouge**  
c) Apartheid  
d) Tutsi
14. One of following persons has never received the Nobel Peace Prize. Who? [2 p.]  
a) Nelson Mandela  
b) Al Gore  
c) Muhammad Junus  
d) **Václav Havel**
15. What are the main gases responsible for the depletion of the ozone layer? [2 p.]  
a) Nitrous oxide  
b) **Chlorofluorocarbons**  
c) Carbon dioxide  
d) Methane
16. "The market value of all final goods and services produced within a country in a given period of time" refers to: [2 p.]  
a) Value added tax  
b) Final investment  
c) **Gross domestic product**  
d) Balance of payments
17. The current round of negotiations under the World Trade Organization is called: [2 p.]  
a) **Doha Development Agenda**  
b) Millennium Development Goals  
c) Everything But Arms  
d) Heavily Indebted Poor Countries Initiative
18. In which country are located the two separatist regions – Abkhazia and South Ossetia? [2 p.]  
a) Azerbaijan  
b) Armenia  
c) **Georgia**  
d) Serbia
19. The process of nutrient enrichment (usually by nitrates and phosphates) in aquatic ecosystems, which is accelerated by human activities, is called: [2 p.]  
a) salinisation  
b) **eutrophication**  
c) desertification  
d) erosion

Questions 20-22: Please read the following article carefully and answer the related questions.

## Congolese primary pupil Tony Lola wins deportation battle

Home Office lifts threat to deport the nine-year-old Didsbury student and his political activist mother to Congo after his school organised a campaign to keep him in the UK. The campaigners at Didsbury primary school were ... **(1)** ... about the fate of Tony Lola, a year 5 pupil, who is a failed asylum seeker.

The Home Office's original decision to deport him and his mother had horrified his schoolfriends and staff. But today it emerged that the immigration minister has granted Tony and his mother, Mireille Maswa, leave to remain in the UK. The school organised a petition that collected thousands of ... **(2)** ... and the children urged the home secretary to reverse the decision to deport Tony.

When Tony's mother lived in the DRC, she was an ... **(3)** ... in the Movement for the Liberation of Congo, a party ... **(4)** ... to the government of Joseph ... **(5)** ... . She arrived in the UK seven years

ago, leaving her young son with relatives. During Christmas 2005 he was arrested by Congolese police. Following his release, his family sent him to the UK where he applied for asylum status with his mother.

Tony is thriving at a school whose catchment area is predominantly white and middle-class. "When we were told the [deportation] letter had come students started asking ... **(6)** ... and the class said they wanted to talk about it."

Nursery teacher has been instrumental in the campaign to prevent the ... **(7)** ... . She said: "The community in Didsbury has become part of their extended family. When Mireille first came here, some people were ... **(8)** ..., as they didn't have experience of asylum seekers. But she has won everyone over."

Written by **Helen Carter**, edited for exam purposes

Published by **guardian.co.uk**, Tue 21 April 2009 10.56 BST

**20.** Fill in the missing gaps in the text using the following words: [4 p.]

<i>signatures</i>	<i>activist</i>	<i>opposed</i>	<i>deportation</i>
<i>suspicious</i>	<i>concerned</i>	<i>Kabila</i>	<i>questions</i>

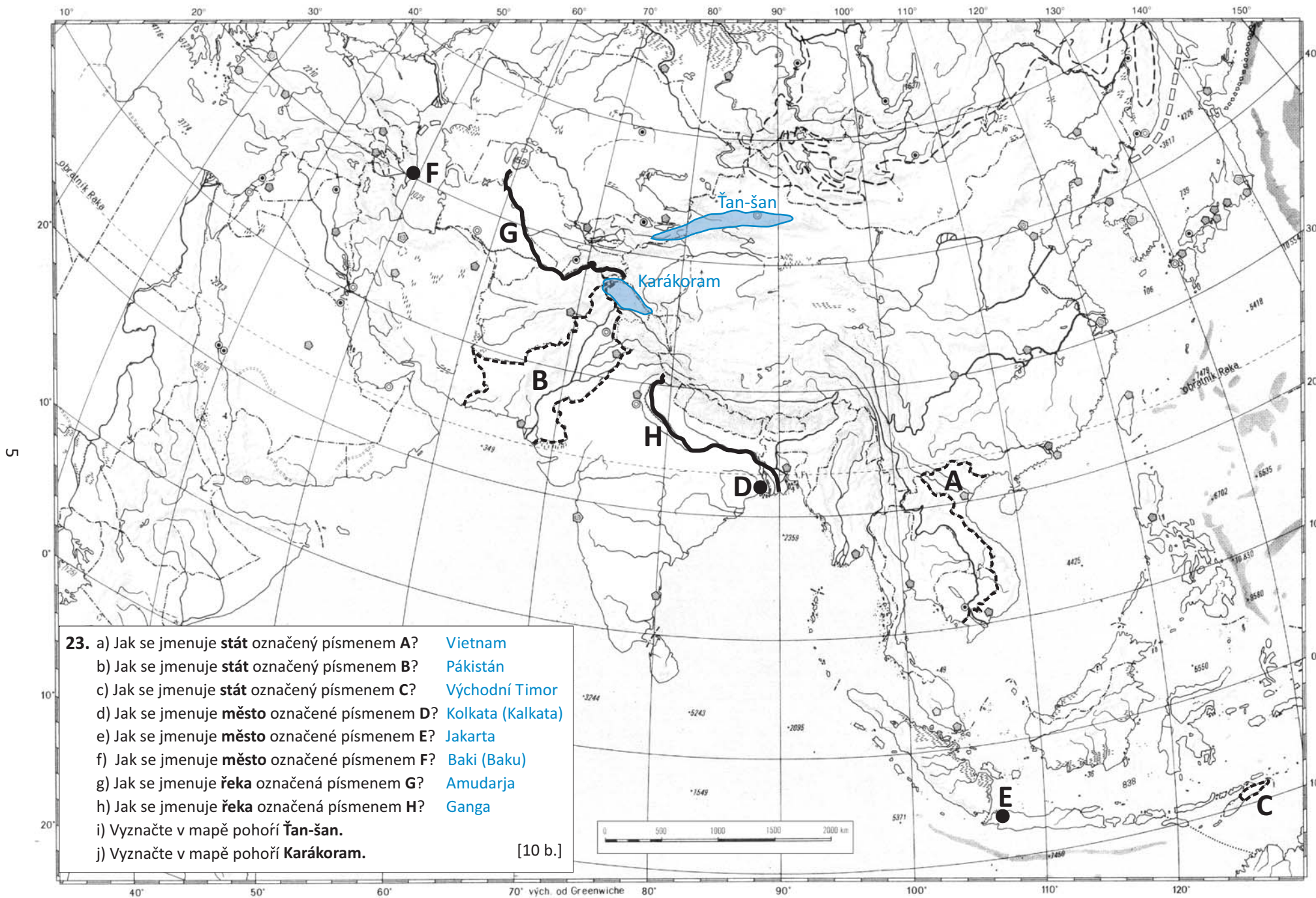
- |                       |                      |                        |
|-----------------------|----------------------|------------------------|
| (1) <b>concerned</b>  | (4) <b>opposed</b>   | (7) <b>deportation</b> |
| (2) <b>signatures</b> | (5) <b>Kabila</b>    | (8) <b>suspicious</b>  |
| (3) <b>activist</b>   | (6) <b>questions</b> |                        |

**21.** Why were not Tony and his mother deported from the UK? [3 p.]

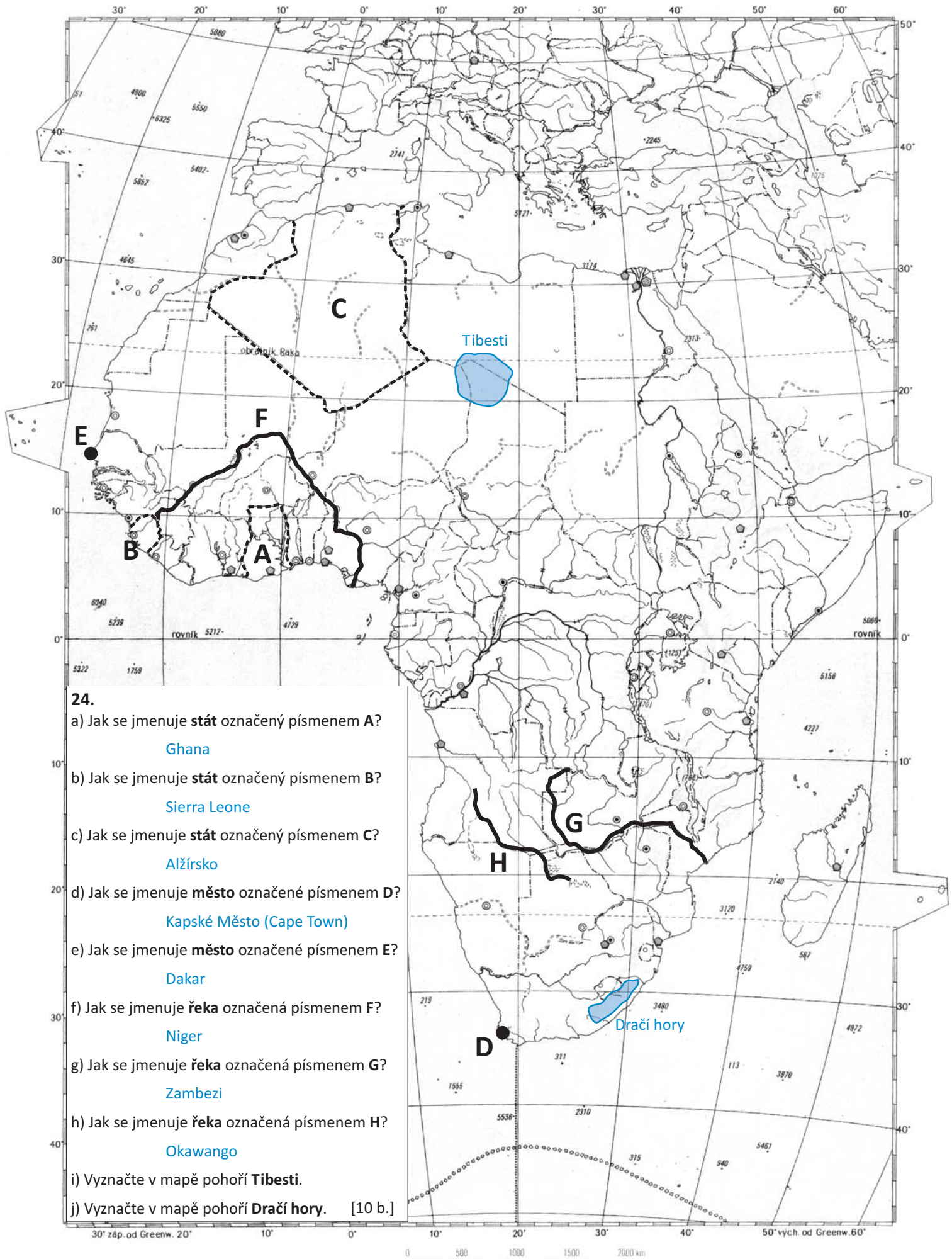
- a) Political activists are always granted asylum in the UK.
- (b)** Because of the campaign organised by the community where Tony and his mother live.
- c) We cannot say from the article.

**22.** Indicate whether the following statements are true or false: [4 p.]

- a) Because the area of Didsbury is predominantly white Tony wasn't accepted very well by his peers. TRUE **FALSE**
- b) When Mireille Maswa came to the UK she brought her six-year old son Tony with her. TRUE **FALSE**



23. a) Jak se jmenuje **stát** označený písmenem **A**? **Vietnam**  
 b) Jak se jmenuje **stát** označený písmenem **B**? **Pákistán**  
 c) Jak se jmenuje **stát** označený písmenem **C**? **Východní Timor**  
 d) Jak se jmenuje **město** označené písmenem **D**? **Kolkata (Kalkata)**  
 e) Jak se jmenuje **město** označené písmenem **E**? **Jakarta**  
 f) Jak se jmenuje **město** označené písmenem **F**? **Baki (Baku)**  
 g) Jak se jmenuje **řeka** označená písmenem **G**? **Amudarja**  
 h) Jak se jmenuje **řeka** označená písmenem **H**? **Ganga**  
 i) Vyznačte v mapě pohoří **Ťan-šan**.  
 j) Vyznačte v mapě pohoří **Karakorom**. [10 b.]



24.

a) Jak se jmenuje **stát** označený písmenem A?

Ghana

b) Jak se jmenuje **stát** označený písmenem B?

Sierra Leone

c) Jak se jmenuje **stát** označený písmenem C?

Alžírsko

d) Jak se jmenuje **město** označené písmenem D?

Kapské Město (Cape Town)

e) Jak se jmenuje **město** označené písmenem E?

Dakar

f) Jak se jmenuje **řeka** označená písmenem F?

Niger

g) Jak se jmenuje **řeka** označená písmenem G?

Zambezi

h) Jak se jmenuje **řeka** označená písmenem H?

Okavango

i) Vyznačte v mapě pohoří **Tibesti**.j) Vyznačte v mapě pohoří **Dračí hory**. [10 b.]